

2803/204
PATTERN CONSTRUCTION II
AND GRADING TECHNIQUES I
PRACTICAL
June/July 2022
Time: 4 hours



THE KENYA NATIONAL EXAMINATIONS COUNCIL

DIPLOMA IN FASHION DESIGN AND CLOTHING TECHNOLOGY
MODULE II

PATTERN CONSTRUCTION II AND GRADING TECHNIQUES I PRACTICAL

4 hours

INSTRUCTIONS TO CANDIDATES

You should have the following items for this examination:

- (i) $\frac{1}{4}$ scale ruler/ square;
- (ii) 30 cm ruler;
- (iii) pencil (2H);
- (iv) rubber/ eraser;
- (v) French curves;
- (vi) sheets of plain paper (size A4);
- (vii) a pair of paper scissors;
- (viii) glue or sellotape;
- (ix) tracing wheel;
- (x) tracing paper;
- (xi) paper pins.

This paper consists of 3 printed pages.

Candidates should check the question paper to ascertain that all the pages are printed as indicated and that no questions are missing.

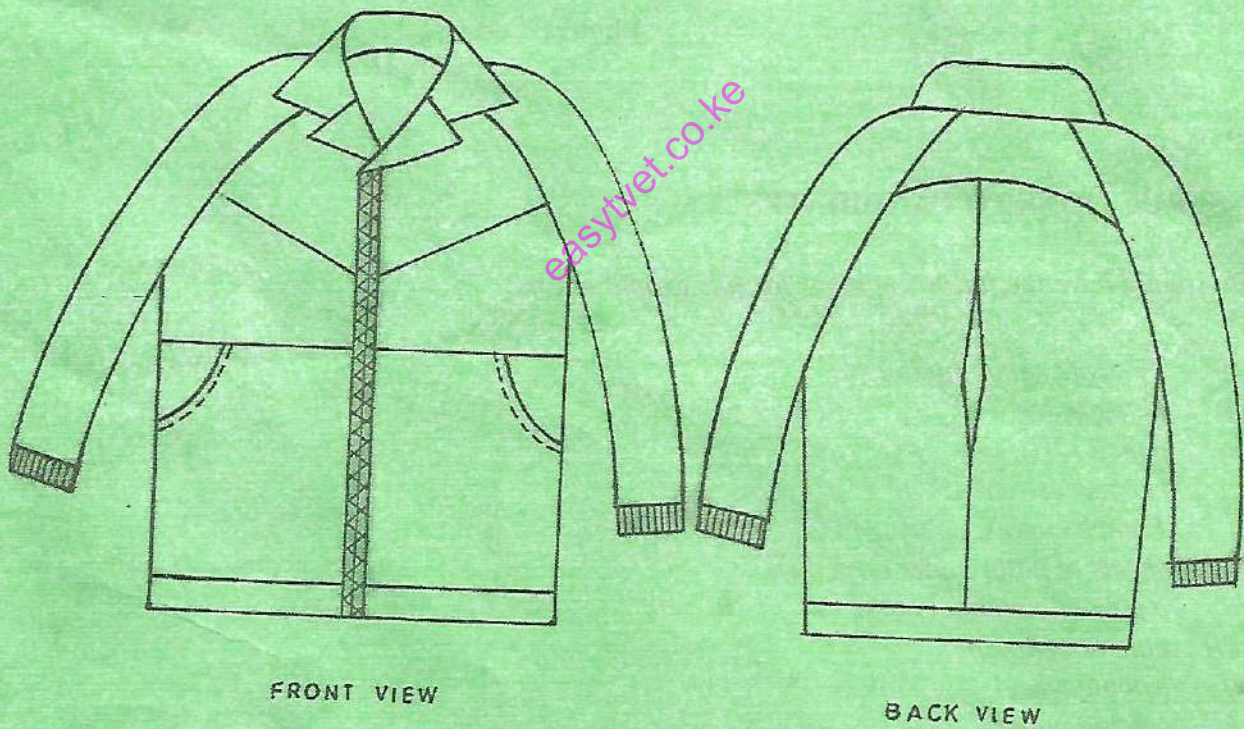
TASKS

1. Using the measurements provided, draft the close-fitting one-piece dress block. (50 marks)

Measurements

Bust	97 cm
Nape to waist	42 cm
Waist to hip	21.2 cm
Armhole depth	23 cm
Neck size	39.2 cm
Shoulder	12.8 cm
Back width	36.6 cm
Dart	8.2 cm
Chest	35 cm
Dress length	95 cm

2. Trace out the flat jacket blocks provided and develop final patterns for the jacket style sketched below. (104 marks)

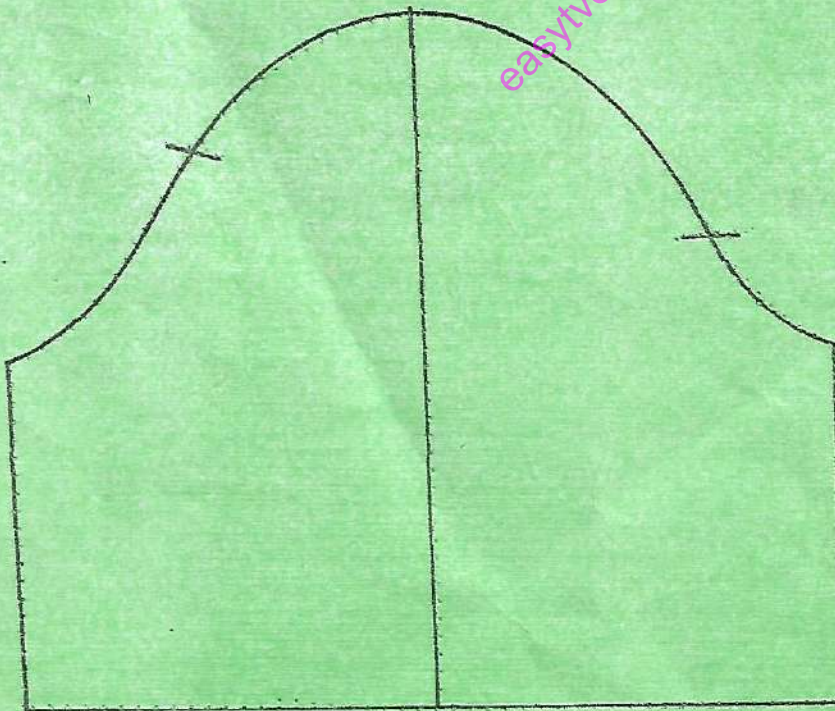
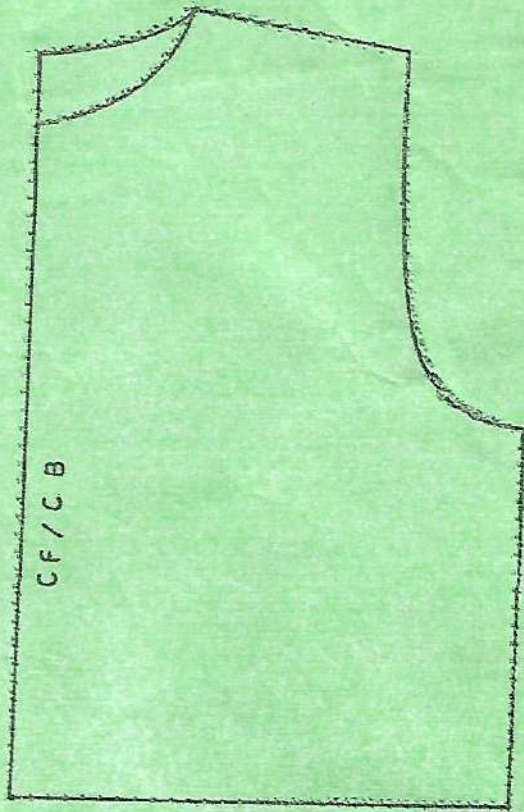


NB:

Neck measurement	=	40 cm
Cuff size	=	23 cm
Full length	=	50 cm
Waistband depth	=	5 cm

3. Trace out the sleeve block provided and grade one size up.

(16 marks)



THIS IS THE LAST PRINTED PAGE.